


Fill in the for the correct answer.

1 What time does the clock show?



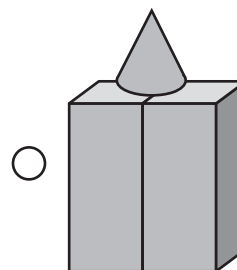
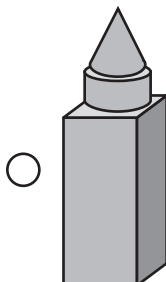
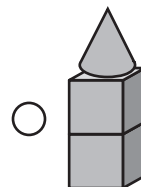
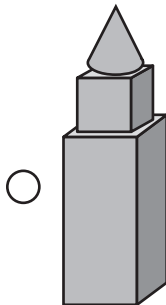
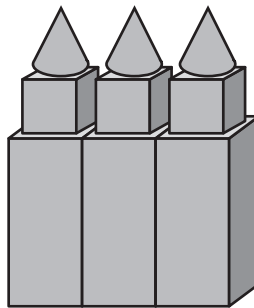
12:30

2:30

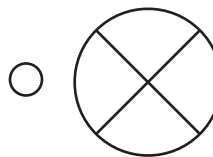
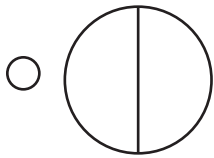
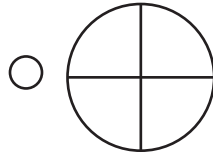
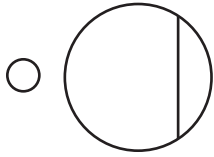
1:30

6:30

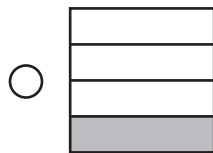
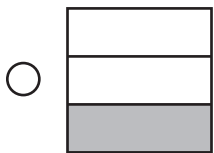
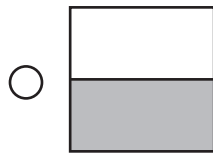
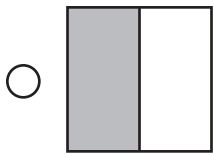
2 Which shape was used to make the larger shape?



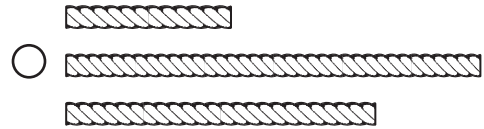
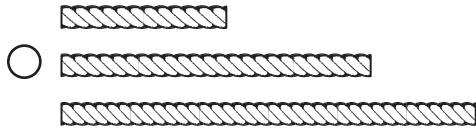
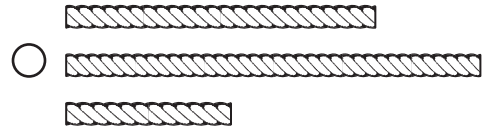
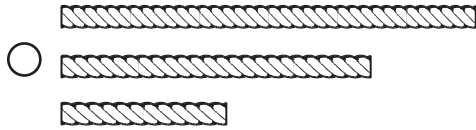
3 Which circle shows halves?



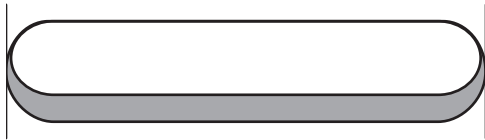
4 Which shows one fourth of the square shaded?



5 Which shows the strings in order from shortest to longest?



6 Measure in paper clips.
How long is the eraser?




1 paper clip

3 paper clips

2 paper clips

4 paper clips

- 7 Amy has a pencil and a crayon.




Ben has a ruler that is longer than Amy's pencil.

Which is true?

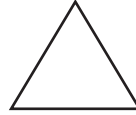
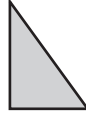

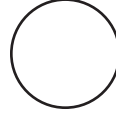
- The ruler is shorter than the crayon.
- The pencil is longer than the ruler.
- The ruler is longer than the crayon.
- The pencil is shorter than the crayon.

-
- 8 Read the clock.

Write the time on the digital clock.



- 9** Which shapes are NOT triangles?
Draw an X on each one.



- 10** Circle the shapes used to make the new shape.

